

Telling the Time



Pack 2



Telling the Time Pack 2

This pack has been created to help children learn to read and write the time.

It allows children to practise telling the time using an analogue clock and digital clock.

Progression has been incorporated into this pack, as well as opportunities to practise and revise what has already been learnt.

Tracking Progress

Keep track of progress using the Progress Tracker.

Your child can think about how they found the work and colour in the appropriate face.




I am confident with this.



I found some parts hard.



I found this difficult, I need more practice.



Keep the Copyright monster happy!

Thank you for purchasing this pack from Teach My Kids.

By purchasing this pack you agree to the following:

The contents of this pack may be used for personal use, or in the classroom by the person who originally purchased this pack.

You must not host, reproduce or share this pack with others in any form. No part of this pack can be edited or altered. This pack may not be used for commercial purposes or sold in any way.

If you have found this pack useful, please feel free to let others know about www.teachmykids.co.uk

Contents

	Page Number
Make Your Own Clock	3
Minutes in an Hour - Past/To	4
minutes past	5
minutes to	7
mixed times (1,2)	11
24 Hour Clock	13
mixed times (3,4)	17
Answers	19

Minutes in an Hour - Past / To



The big hand on a clock tells you how many **minutes past** or **minutes to** the hour it is.

Fill in the missing numbers. Use the words: minutes past, minutes to, half past, quarter

o'clock

5 minutes past

minutes to

minutes past

25 minutes to

25 minutes past

How many minutes past the hour is it if the big hand is on:

- 4 - 20 minutes past
- 2 -
- 5 -
- 1 -

How many minutes to the next hour is it if the big hand is on:

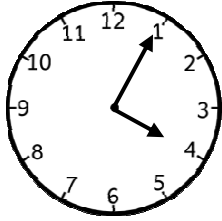
- 8 - _____ minutes to
- 10 -
- 11 -
- 7 -

Time - minutes past (1)



Write the time shown on the clocks in two ways.

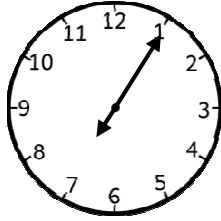
1.



4:05

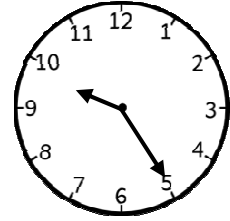
5 past 4

2.



.

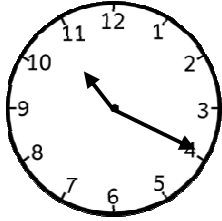
3.



.

25 past 9

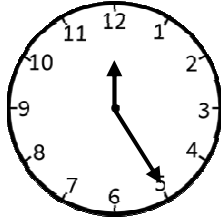
4.



.

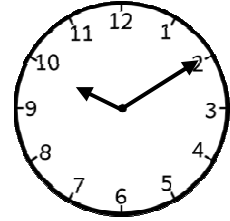
20 past 10

5.



.

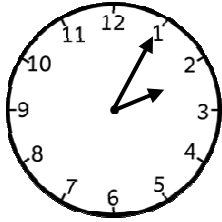
6.



.

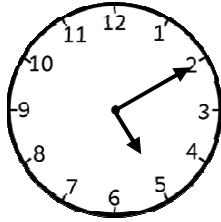
10 past 10

7.



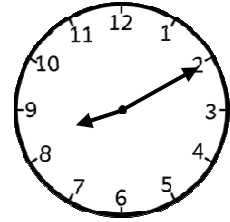
.

8.



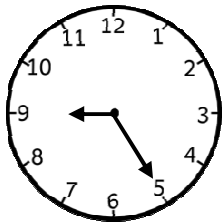
5:10

9.



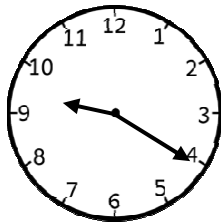
.

10.



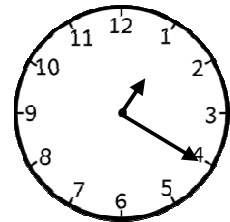
.

11.



.

12.



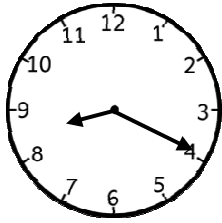
.

Time - minutes past (2)



Show the time on the clock. Remember: a big arrow for minutes, a small arrow for hours.

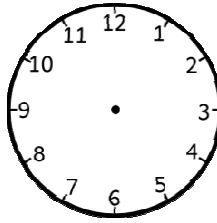
1.



8:20

20 minutes past 8

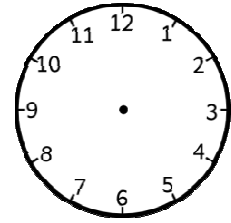
2.



5:20

20 past 5

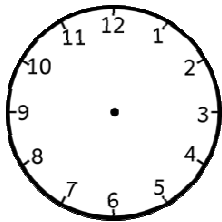
3.



2:25

25 minutes past 2

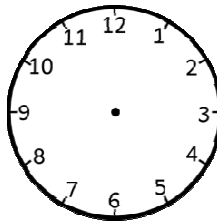
4.



4:25

25 past 4

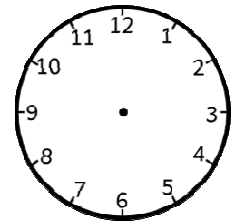
5.



10:05

5 minutes past 10

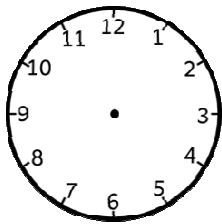
6.



3:05

5 past 3

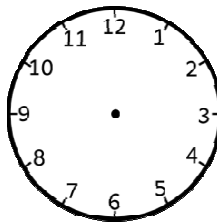
7.



12:20

20 minutes past 12

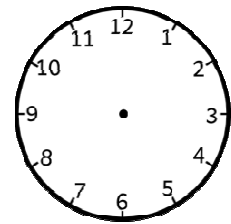
8.



8:10

10 past 8

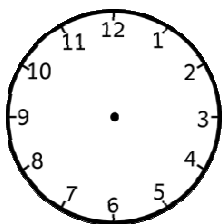
9.



1:05

5 past 1

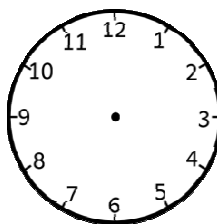
10.



6:10

10 minutes past 6

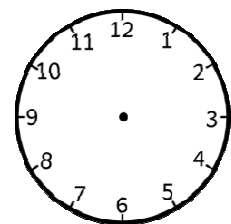
11.



11:25

25 past 11

12.



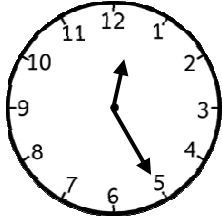
3:10

10 past 3

Time - Mixed Times (1)

Write the time shown on the clocks in two ways.

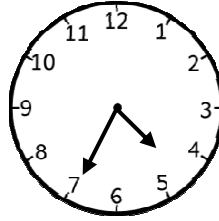
1.



12:25

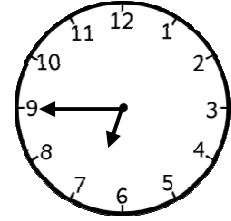
25 minutes past 12

2.



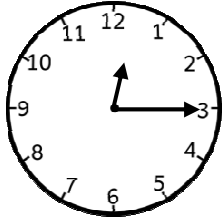
.

3.



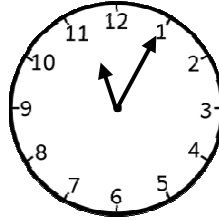
.

4.



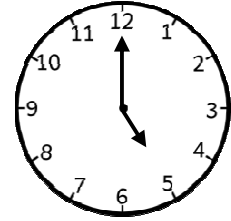
.

5.



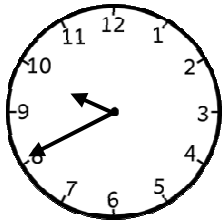
.

6.



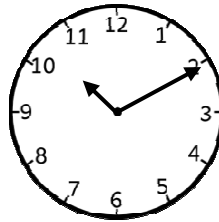
.

7.



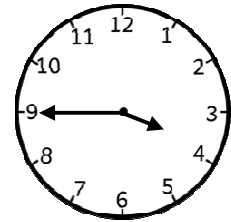
.

8.



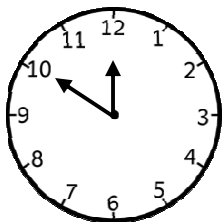
.

9.



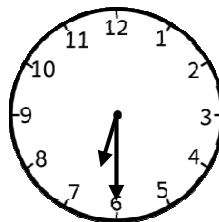
.

10.



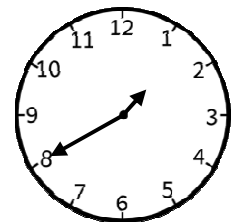
.

11.



.

12.



.

24 Hour Clock - Write the Time (2)



When reading the time digitally, you can use the 24 hour clock.

AM = 12.00 o'clock midnight till 12 o'clock midday (morning)

PM = 12 midday till 12 midnight (afternoon / evening)



Write these times digitally, using the 24 hour clock. The first two have been done for you.

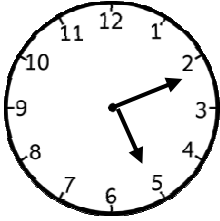
1) 6:25 pm	18:25
2) Quarter past 2 (am)	2:15
3) 8:55 pm	
4) Half past 1 (pm)	
5) 7:20 am	
6) Twenty past 4 (am)	
7) 25 minutes to 10 (pm)	
8) 12 o'clock (midnight)	
9) 2:30 (pm)	
10) Ten past 11 (pm)	
11) 5 minutes past 5 (am)	
12) Ten to 8 (pm)	
13) Six o'clock (pm)	
14) 3:55 (pm)	
15) Twenty five past 12 (am)	
16) 1:20 (pm)	

Time - mixed times (4)



Is it am or pm? Show and write the time using the 24 hour clock.

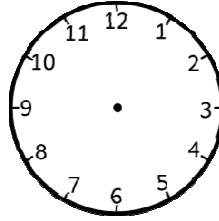
1. pm



17:11

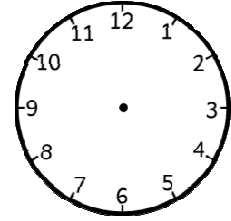
11 minutes past 5

2. pm



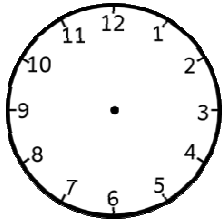
21 minutes to 9

3. pm



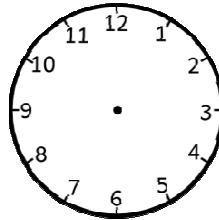
15:33

4. am



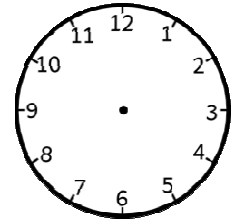
2:47

5. am



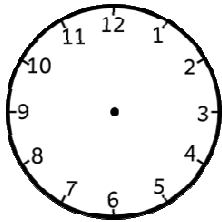
10:32

6. pm



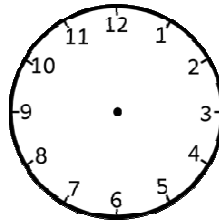
12 minutes past 6

7. pm



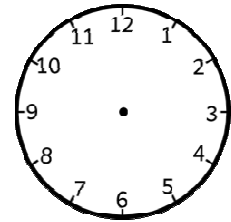
9 minutes to 10

8. pm



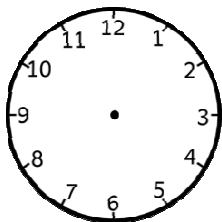
14:59

9. am



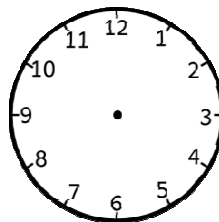
11:26

10. am



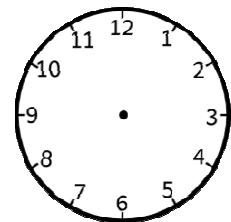
2:39

11. pm



19:04

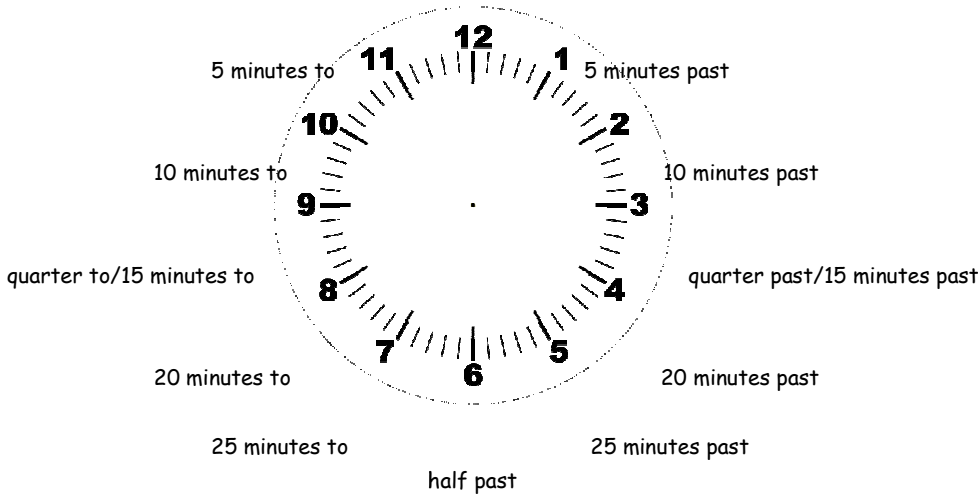
12. pm



6 minutes past 4

Answers

Minutes in an hour - past/to



- | | |
|---------------------|--------------------|
| 4 - 20 minutes past | 8 - 20 minutes to |
| 2 - 10 minutes past | 10 - 10 minutes to |
| 5 - 25 minutes past | 11 - 5 minutes to |
| 1 - 5 minutes past | 7 - 35 minutes to |

Time - minutes past (1)

- | | | | |
|---------------------|---------------------|--------------------------|---------------------|
| 1) 4:05 5 past 4 | 2) 7:05 5 past 7 | 3) 9:25 25 past 9 | 4) 10:20 20 past 10 |
| 5) 12:25 25 past 12 | 6) 10:10 10 past 10 | 7) 2:05 5 minutes past 2 | 8) 5:10 10 past 5 |
| 9) 8:10 10 past 8 | 10) 9:25 25 past 9 | 11) 9:20 20 past 9 | 12) 1:20 20 past 1 |

Time - minutes past (2)

1.	2.	3.	4.	5.	6.
7.	8.	9.	10.	11.	12.

Time - minutes to (1)

- | | | | |
|-----------------|-------------------|-------------------|------------------|
| 1) 7:55 5 to 8 | 2) 1:55 5 to 2 | 3) 10:40 20 to 11 | 4) 3:40 20 to 4 |
| 5) 2:55 10 to 3 | 6) 11:50 10 to 12 | 7) 4:35 25 to 5 | 8) 9:35 25 to 10 |
| 9) 5:50 10 to 6 | 10) 6:40 20 to 7 | 11) 10:55 5 to 11 | 12) 7:40 20 to 8 |












Time - minutes to (2)

1.	2.	3.	4.	5.	6.
7.	8.	9.	10.	11.	12.

Time - minutes to (3)

- | | | | |
|------------------|-------------------|--------------------|-----------------|
| 1) 7:55 5 to 8 | 2) 3:55 5 to 4 | 3) 8:35 25 to 9 | 4) 3:35 25 to 4 |
| 5) 6:40 20 to 7 | 6) 11:40 20 to 12 | 7) 2:50 10 to 3 | 8) 4:50 10 to 5 |
| 9) 12:40 20 to 1 | 10) 6:35 25 to 7 | 11) 10:40 20 to 11 | 12) 3:55 5 to 4 |













Time - minutes to (4)

1.  10 minutes to 9	2.  3:55	3.  5 minutes to 3	4.  20 minutes to 11	5.  6:40
7.  10:35	8.  25 minutes to 1	9.  11:50	10.  4:35	11.  20 minutes to 8
12.  4:55				

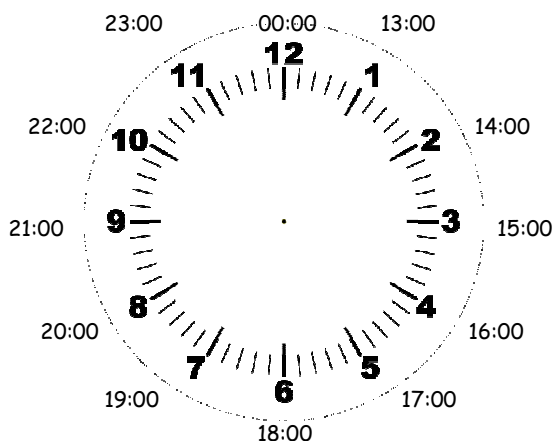
Time - Mixed Times (1)

- | | | | |
|------------------------------|---------------------|-----------------------|---------------------------|
| 1) 12:25, 25 minutes past 12 | 2) 4:35, 25 to 5 | 3) 6:45, quarter to 7 | 4) 12:15, quarter past 12 |
| 5) 11:05, 5 past 11 | 6) 5:00, 5 o'clock | 7) 9:40, 20 to 10 | 8) 10:10, 10 past 10 |
| 9) 3:45, quarter to 4 | 10) 11:50, 10 to 12 | 11) 6:30, half past 6 | 12) 1:40, 20 to 2 |

Time - Mixed Times (2)

1. 	2. 	3. 	4. 	5. 	6. 
7. 	8. 	9. 	10. 	11. 	12. 

24 Hour Clock



24 Hour Clock - Write the Time (1)

- | | | | |
|-------------------------------------|--------------------------------|--|---------------------------------|
| 1) 14:15 quarter past two | 2) 17:25 twenty five past five | 3) 15:35 twenty five minutes to four | 4) 16:50 ten minutes to five |
| 5) 18:25 twenty five past six | 6) 19:30 half past seven | 7) 20:55 five minutes to nine | 8) 21:05 five minutes past nine |
| 9) 12:20 twenty minutes past twelve | 10) 18:30 half past six | 11) 14:10 ten minutes past two | |
| 12) 19:40 twenty minutes to eight | 13) 18:50 ten minutes to seven | 14) 15:25 twenty five minutes past three | |
| 15) 13:45 quarter to two | | | |

24 Hour Clock – Write the Time (2)

- 1) 18:25 2) 2:15 3) 20:55 4) 13:30 5) 7:20 6) 4:20 7) 21:35 8) 00:00 9) 14:30 10) 23:10 11) 5:05 12) 19:50 13) 18:00
 14) 15:55 15) 00:25 16) 13: 20













24 Hour Clock – Write the Time (3)

- 1) 17:14 2) 6:12 3) 21: 37 4) 11:40 5) 13:55 6) 19:32 7) 14:42 8) 13:56 9) 23:08 10) 00:06 11) 16:44 12) 20:18
 13) 14:00 14) 5:51 15) 22:39 16) 19:48

Time – Mixed Times (3)

- 1) 8:15 2) 00:20 3) 14:30 4) 18:00 5) 6:50 6) 2:35 7) 6:45
 quarter past 8 20 past 12 half past 2 6 o'clock 10 minutes to 7 25 to 3 quarter to 7
 8) 20:05 9) 21:30 10) 6:25 11) 21:55 12) 9:00
 5 past 8 half past 9 25 past 6 5 to 10 9 o'clock

Time – Mixed Time (4)

1.  20: 39	2.  27 minutes to 3	3.  13 minutes to 3	4.  28 minutes to 11	5.  18:12	6.  21:51
7.  1 minute to 3	8.  26 minutes past 11	9.  21 minutes to 3	10.  4 minutes past 7	11.  16:06	12.  16:06